

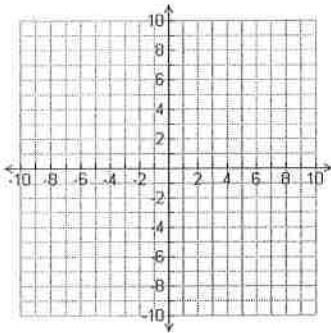
Linear Systems 100% Quiz

Name _____

Solve by Graphing:

$$y = 3x + 1$$

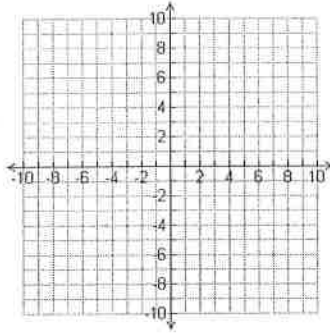
$$y = 2x + 3$$



Solve by Graphing:

$$y = -x + 1$$

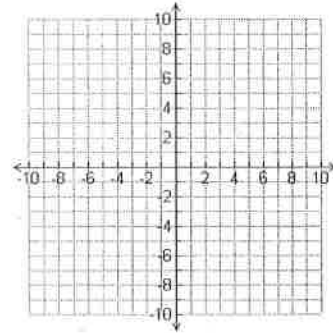
$$y = 2x + 4$$



Solve by Graphing:

$$y = -x + 5$$

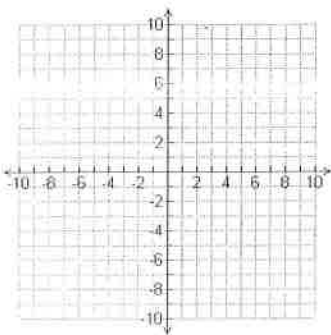
$$y = -2x + 3$$



Solve by Graphing:

$$2x + 3y = 6$$

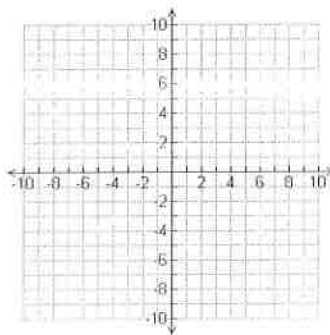
$$2x + y = 2$$



Solve by Graphing:

$$5x = 2y - 8$$

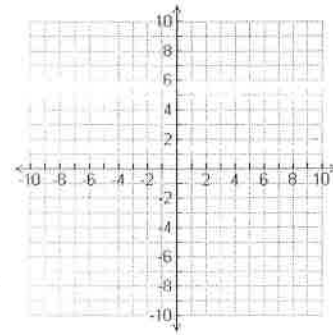
$$3x + 2y = -8$$



Solve by Graphing:

$$3x - 2y = 6$$

$$3x - y - 4 = 0$$



<p>How many solutions does this system have:</p> $y = \frac{2}{3}x - 5$ $2x - 3y = 6$	<p>How many solutions does this system have:</p> $5x - 2y = 4$ $4y = 10x - 8$	<p>How many solutions does this system have:</p> $2x - y = 7$ $4x + 3y = -9$
<p>Find the value of k if the following are parallel:</p> $2x - y = 7$ $kx - 2y = 8$	<p>Find the value of k if the following system has infinite solutions:</p> $kx - 3y = 4$ $y = \frac{1}{2}x - \frac{4}{3}$	<p>Find the value of x if the following system is inconsistent:</p> $kx + 5y = 10$ $5x - 2y - 6 = 0$
<p>Solve the following by elimination:</p> $x - y = 11$ $2x + y = 19$	<p>Solve the following by elimination:</p> $7x + 2y = 24$ $8x + 2y = 30$	<p>Solve the following by elimination:</p> $4x + 8y = 20$ $-4x + 2y = -30$

Solve the following by elimination:

$$9y = 4x + 9$$

$$x - 3y = -6$$

Solve the following by elimination:

$$2x - 3y = 4$$

$$4x = 8 + 6y$$

Solve the following by elimination:

$$x - 2y = 3$$

$$4y - 2x = 8$$

Solve the following by substitution:

$$y = 6x - 11$$

$$2x + 3y = 7$$

Solve the following by substitution:

$$2x - 3y = -1$$

$$y = x - 1$$

Solve the following by substitution:

$$7x + 2y = 13$$

$$x - 2y = 11$$

Find the value of two numbers if their sum is 12 and their difference is 4.

Flying to Kampala with a tailwind a plane averaged 158 km/h. On the return trip the plane only averaged 112 km/h while flying back into the same wind. Find the speed of the wind and the speed of the plane in still air.

Brenda's school is selling tickets to a spring musical. On the first day of ticket sales the school sold 3 senior citizen tickets and 9 child tickets for a total of \$75. The school took in \$67 on the second day by selling 8 senior citizen tickets and 5 child tickets. What is the price each of one senior citizen ticket and one child ticket?